
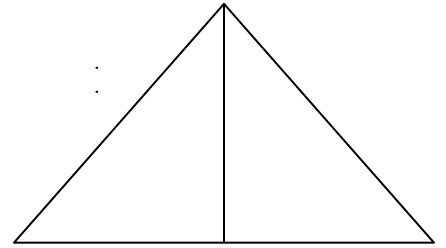




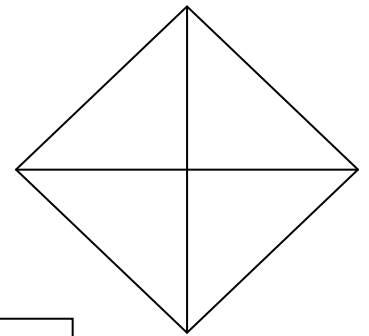
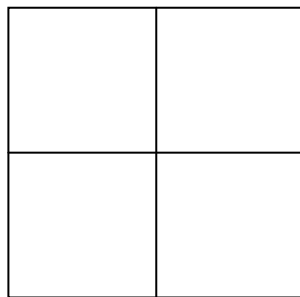
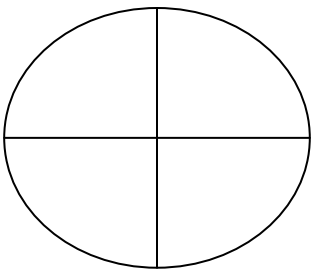


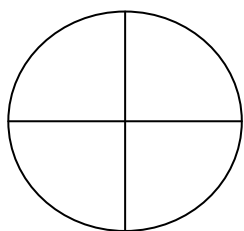
**Colour in  $\frac{1}{2}$  (1 half) of each of these shapes**



**Colour in  $\frac{1}{4}$  (1 quarter) of each of these shapes**

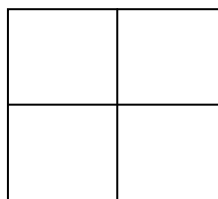


Colour in  $\frac{1}{2}$  (1 half) of each of these shapes



---

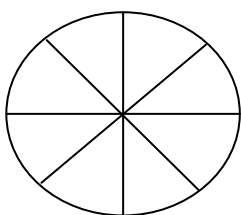
---



---

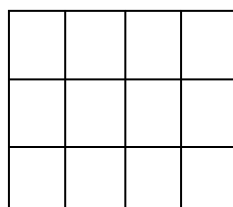
---

Colour in  $\frac{1}{4}$  (1 quarter) of each of these shapes



---

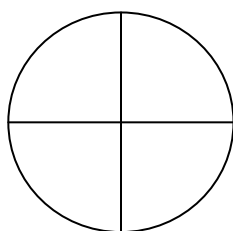
---



---

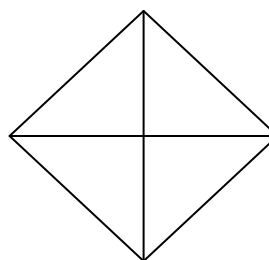
---

Ext: Colour in  $\frac{3}{4}$  (3 quarters) of each of these shapes



---

---

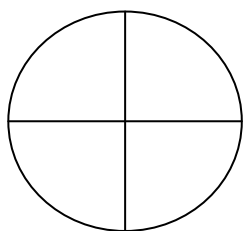


---

---

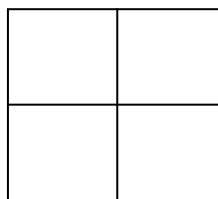
Remember!  
Count the number of sections  
Divide by the bottom number  
Multiply by the top number

Colour in  $\frac{1}{2}$  (1 half) of each of these shapes



---

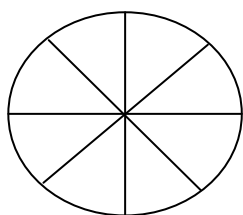
---



---

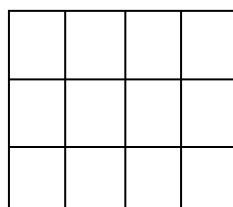
---

Colour in  $\frac{1}{4}$  (1 quarter) of each of these shapes



---

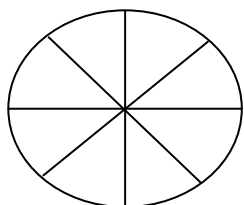
---



---

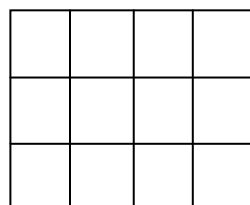
---

Colour in  $\frac{3}{4}$  (3 quarters) of each of these shapes



---

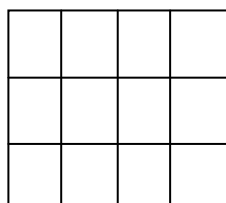
---



---

---

Ext: Colour in  $\frac{1}{6}$  (1 sixth) of each of this shape



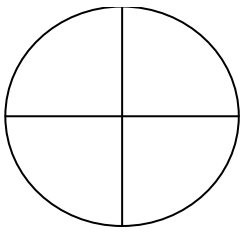
---

---

**Remember!**  
Count the number of sections  
Divide by the bottom number  
Multiply by the top number

21.3.13 Can I find fractions of shapes?

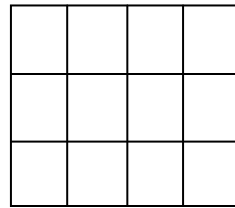
Colour in  $\frac{1}{2}$



---

---

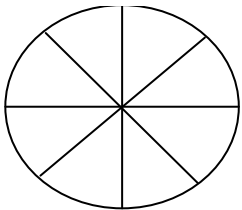
Colour in  $\frac{1}{4}$



---

---

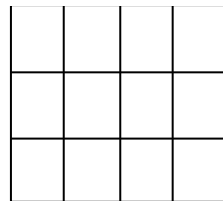
Colour in  $\frac{3}{4}$



---

---

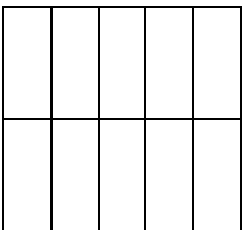
Colour in  $\frac{1}{6}$



---

---

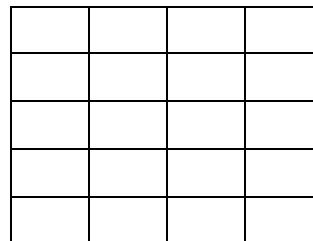
Colour in  $\frac{1}{5}$



---

---

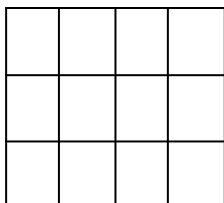
Colour in  $\frac{1}{10}$



---

---

Ext: Colour in  $\frac{2}{6}$



---

---

**Remember!**  
Count the number of sections  
Divide by the bottom number  
Multiply by the top number